



Time 1


1. What time does each clock show?




___ o'clock



___ o'clock

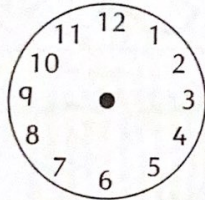


___ o'clock

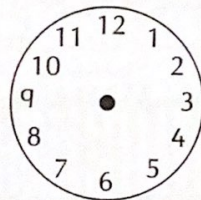


___ o'clock

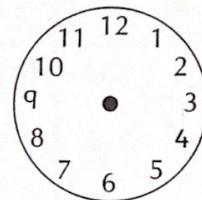
2. Draw the hands to show these times.




2 o'clock



9 o'clock




1 o'clock




7 o'clock

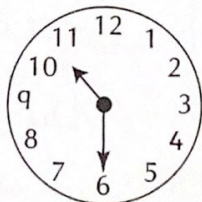
3. What time does each clock show?



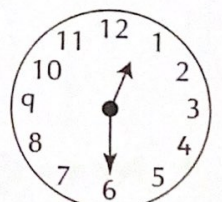
$\frac{1}{2}$ past ___



$\frac{1}{2}$ past ___

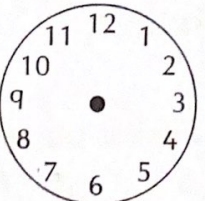


$\frac{1}{2}$ past ___

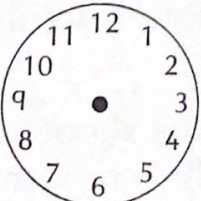


$\frac{1}{2}$ past ___

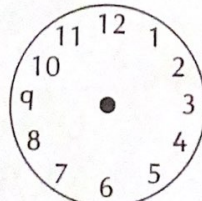
4. Draw the hands to show these times.




$\frac{1}{2}$ past 1



$\frac{1}{2}$ past 4



$\frac{1}{2}$ past 11



$\frac{1}{2}$ past 6